




More Intervals




1. Name these harmonic intervals. They are all in F major.
















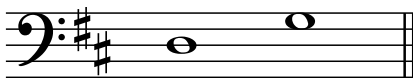
2. And now, name these melodic intervals. Which key are they in? _____















3. Intervals are always written **above** the tonic, even if you have to use leger lines. Write these harmonic intervals above the given tonic note:



5th

7th

7th

4th

3rd

4. What is an interval of an 8th usually called? _____